

**MÄHRIBAN ÇAGALAR, HORMATLY ENE-ATALAR!  
ELIŇZDÄKI KITAPÇADA TOMUSKY DYNÇ ALYŞ MÖWSÜMINI GYZYKLY WE  
PEÝDALY GEÇIRMEGIŇIZ ÜÇIN GÜÝMENJELER SIZE GARAŞÝAR!**



# SUDOKU

		2		3	
5		6			
2	5		3		
		1		5	4
			1		3
	4		6		

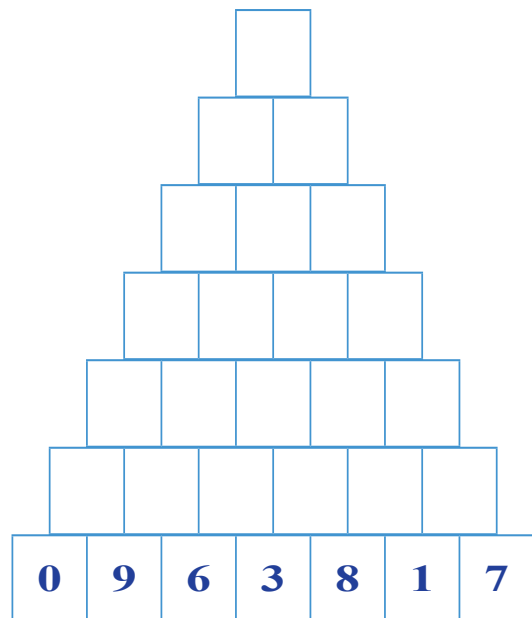
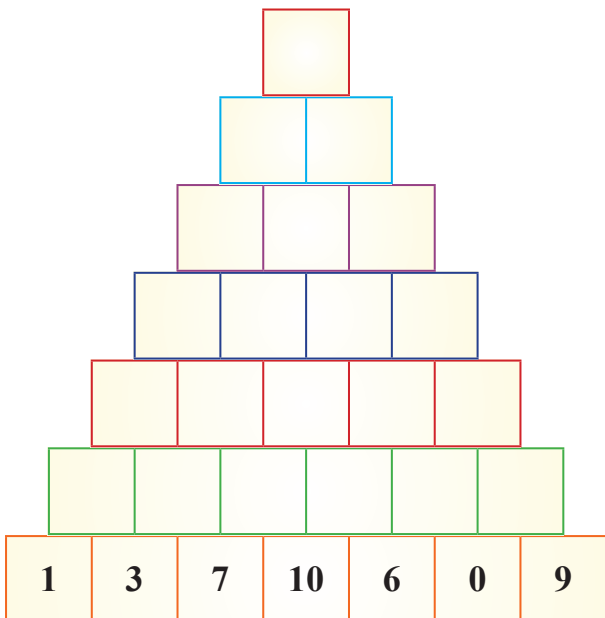
	5			3	
		4	6		
4	2			1	6
3	1			5	4
		3	1		
	4			6	

						6	
		3	5				1
		5		2	1	7	8
		7			6		
	2		1		8		4
			3			9	
	5	9	7	1		6	
6					4	1	
	8						

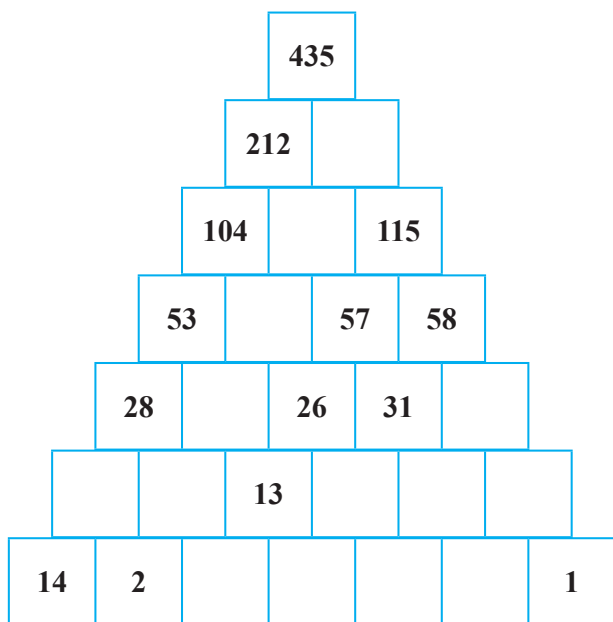
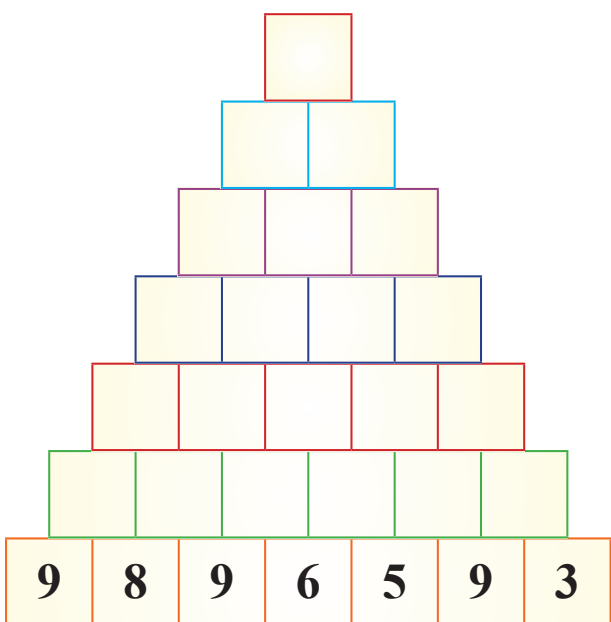
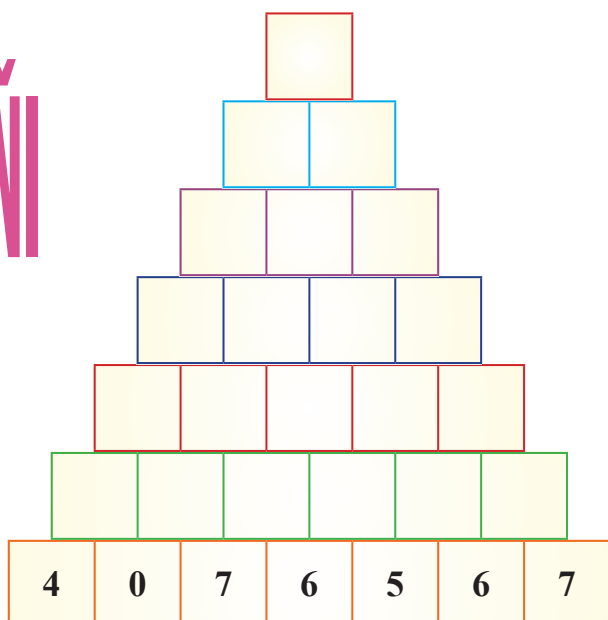

3	2		6	7			
					5		7
	5		2			4	
1				5	4	3	
				1		5	6
			7	9			1
		3		7			
		2		3		9	
	9	1					

		4		9			
3				1	9		
1				7	6		
9				7	3		8
	6				7		
4				1		2	9
		3		4		1	
7		5			2		3
			3				6





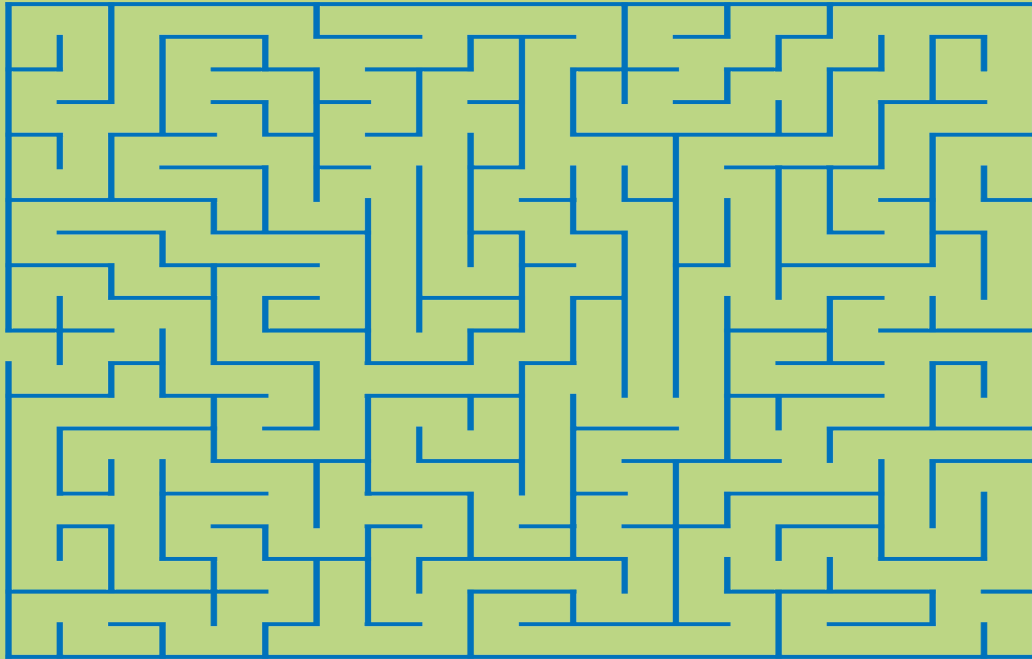
		6		5			1
	2				7	6	4
	1					8	9
			8	7	4		2
	9		5	2	3		
	5	7					6
	4	2	9				1
6				4		3	



# SAN DIŇI









LABIRINTLER



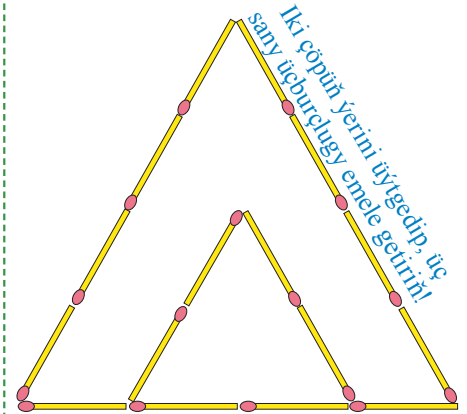


# TAPAWUTLARY TAPYŇ

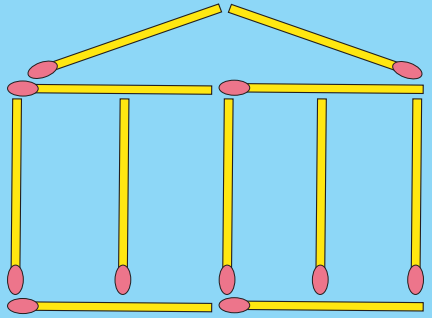




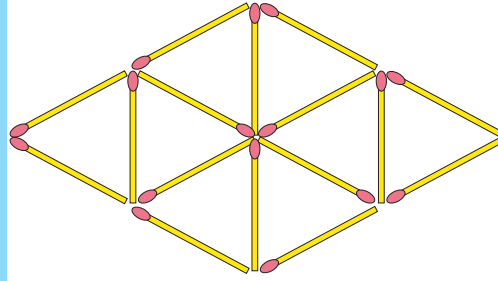
## ZEHIN SORAGLAR



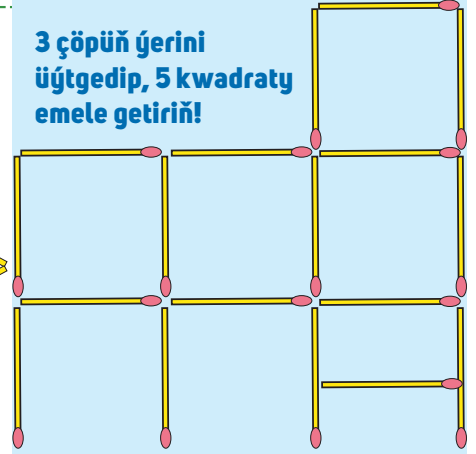
İki çöpüň ýerini üýtgedip, 11 kwadratny emele getirin!



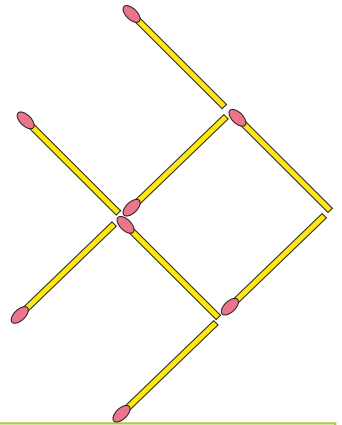
Dört çöpi aýryp, dört deň üçburçlugy emele getirin!



3 çöpüň ýerini üýtgedip, 5 kwadratny emele getirin!

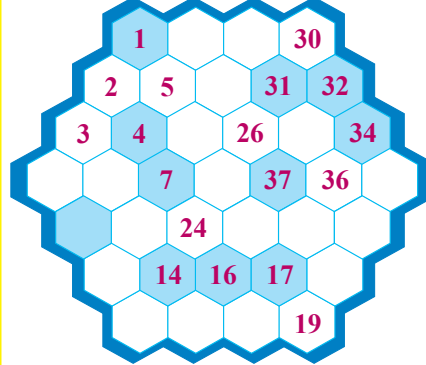


Üç çöpüň ýerini üýtgedip, balygy yzyna öwürin!

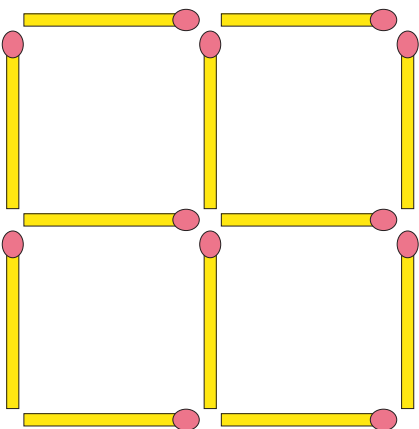


1	+		=	4				3	-		=	
+			-					+				+
8			+		=	7						6
=			=		=			=				=
-			=	2		1		-			=	6
		-						+				
4	+		=			3	+	5	=			
			=					=				
		-	3	=	3			10	-		=	
+			+		-	-					+	
2			2	+	0	=					=	
=			=		=			=			=	
-			=		7			-			=	2

Sanlary 1-den 37-ä çenli yzygiderli ýazyň!

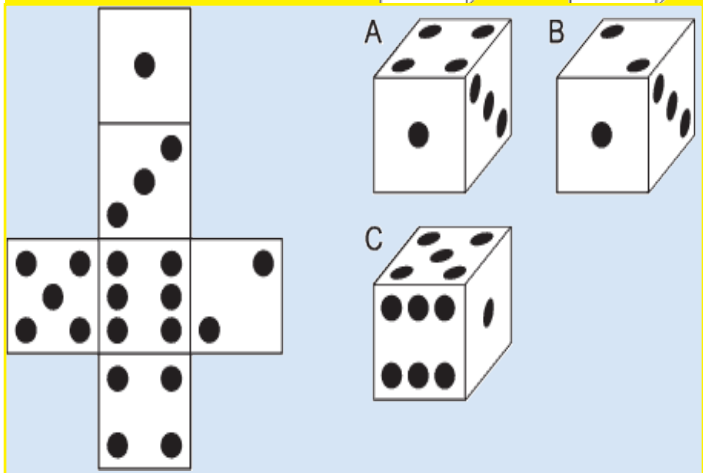
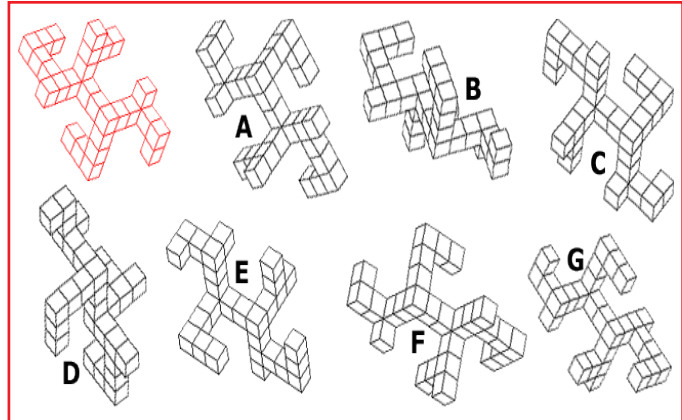
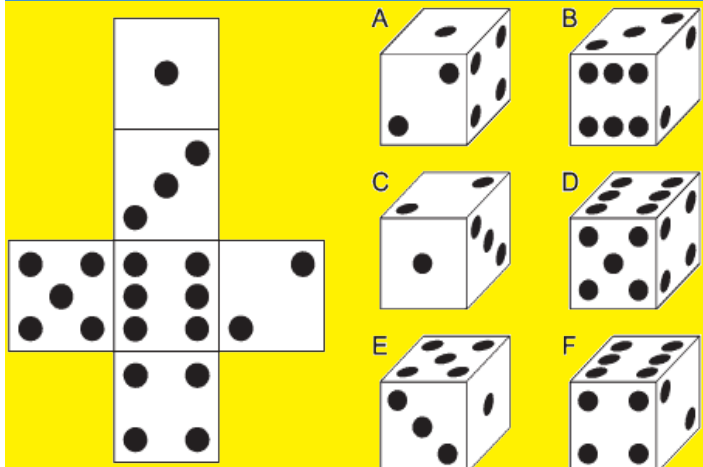
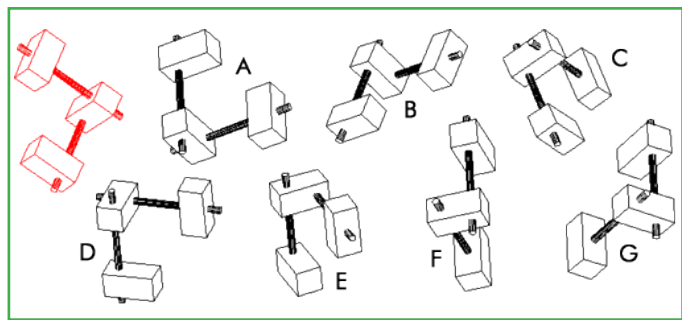
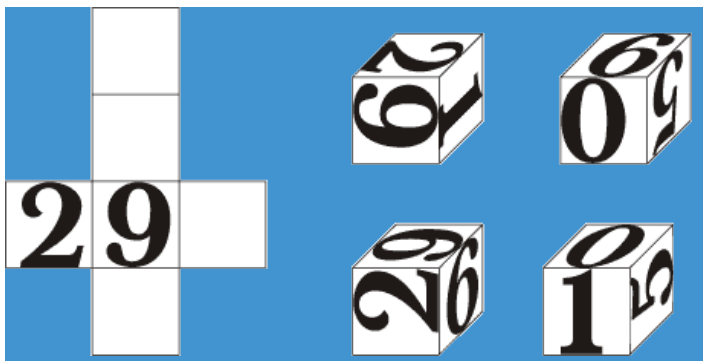


4 çöpüň ýerini üýtgedip, 10 sany dörtburçluk emele getirin!

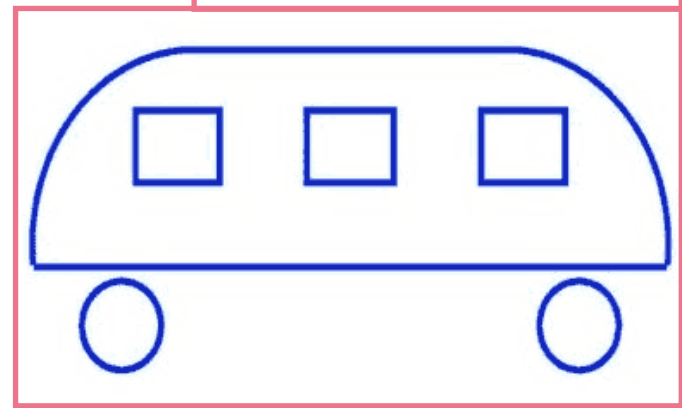


2	0	2	7	1	0	7	7	2	6	1234	33	
2	0	3	4	2	9	4	5	9	3	515	900899	
3	8	1	7	3	5	0	5	3	3	472	77	
8	1	5	0	4	1	8	6	9	5	808999	15	
5	1	2	7	4	5	2	1	2	6	4596	126	
4	7	2	5	6	2	9	6	0	7	745		
7	0	2	1	9	0	0	8	9	9	203	2222	
2	9	2	0	7	4	2	5	6	1	256	2027	
3	6	2	7	8	0	8	9	9	9	36	10	60






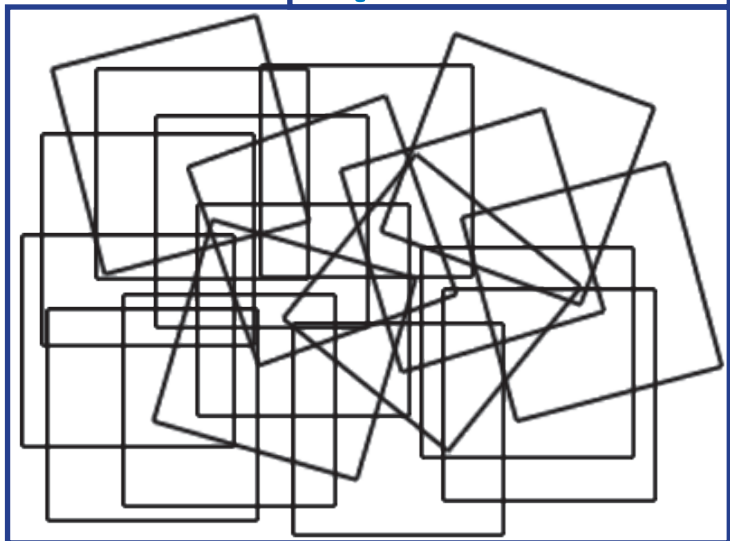
### HÄYSY TARAPA BARYÄR



### ÝYLDYZY TAPYŇ



### NÄÇE SANY KWADRAT BAR



# MYSALLAR

$6 + \square = 7$

$+$

$+$

$\square + \square = 2$

$2 + \square = 6$

$+$   
4  
=

$=$   
 $\square + 3 = \square$

$\square + \square = 7$

$+$   
2  
=

$+$   
7  
=

$\square + \square = 9$

$5 + \square = \square$

$+$   
5  
=

$+$   
1  
=

$+$   
3  
=

$2 + \square = \square$

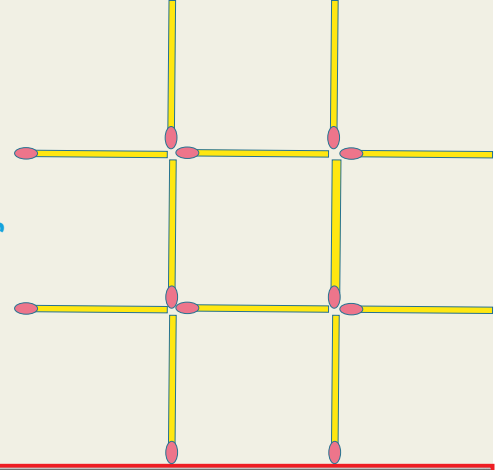
$\square + \square = 7$

$=$   
 $\square + \square = 8$

$=$   
 $\square + \square = 8$



3 çöpüň ýerini üýtgedip, 3 kwadrat emele getirňiň



$7 - 2 = \square$

$-$   
1  
=

$-$   
4  
=

$\square - \square = 3$

$\square + 8 = \square$

$+$   
 $\square + 6 = \square$

$-$   
7  
=

$-$   
5  
=

$=$   
 $- \square = 5$

$+$   
2  
=

$+$   
3  
=

$-$   
 $\square = \square$

$9$   
 $8 - \square = \square$

$+$   
5  
=

$3 + 1 = \square$

$-$   
3  
=

$8 - \square = 2$

$2 + \square = 7$

$-$   
4  
=

$+$   
3  
=

$\square + \square = 7$

$\square + 1 = \square$

$-$   
2  
=

$-$   
 $\square = \square$

$\square - \square = 1$

$+$   
 $\square - 3 = 6$


$-$   
6  
=

$=$   
 $\square + 1 = \square$

$\square + 4 = \square$

$-$   
4  
=

$5 - \square = \square$



$7 - \square = 2$

$2 + \square = 8$

$+$   
4  
=

$-$   
3  
=

$\square - \square = 3$

$\square + 1 = \square$

$+$   
2  
=

$-$   
 $\square = \square$

$\square - \square = 1$

$+$   
3  
= 6


$+$   
6  
=

$\square + 7 = \square$

$\square - 8 = \square$

$-$   
4  
=

$5 - \square = \square$





Deňlemäniň dogry bolmagy üçin boş ýere  
(x), (+) ýa-da (-) amallaryny goňuň!

$$3 \bigcirc 2 \bigcirc 1 = 5$$

$$7 \bigcirc 3 \bigcirc 2 = 8$$

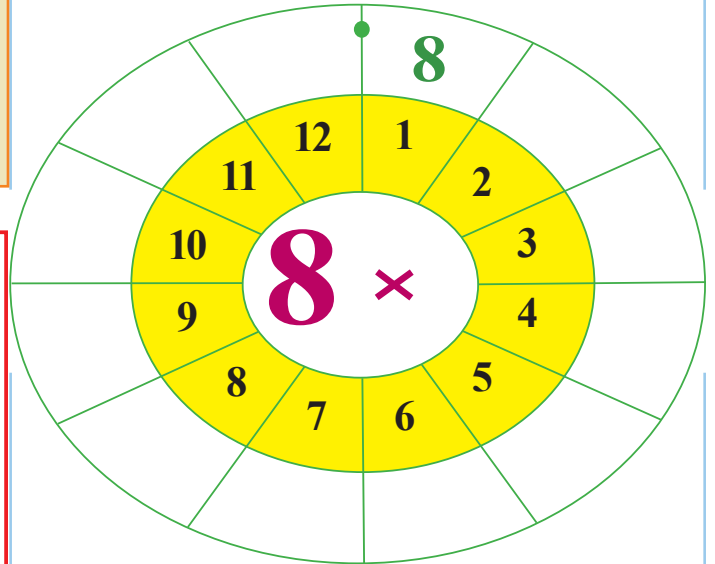
$$2 \bigcirc 3 \bigcirc 4 = 2$$

$$6 \bigcirc 5 \bigcirc 8 = 3$$

	+		÷		=	5
+		×		+		-
	+		÷	2	=	
÷		÷		-		+
	+	6	÷		=	
=		=		=		=
4	+		÷		=	

9	+		=	11		5	-		=	
+			-		-	+			+	
7			+		=	7			=	5
=			=		=				=	
	-	4	=		2		-		=	8

Reňkli bölekdäki sanlary  
4-e köpeldiň!



Reňkleri dogry aýdyň

SARY GÖK NARYNÇ GARA  
GYZYL ÝAŞYL MAWY SARY  
GYZYL GÜLGÜNE ÝAŞYL  
GARA GÖK MAWY ÝAŞYL  
GÖK NARYNÇ

